



Double the spots

This activity will help your child to find doubles.


Draw the matching number of spots on these butterflies and complete the number sentences.




$$4 + \boxed{4} = \boxed{}$$



$$5 + \boxed{} = \boxed{}$$



$$3 + \boxed{} = \boxed{}$$



$$2 + \boxed{} = \boxed{}$$

If you have time try to find out double 6 and double 10.

$$6 + \boxed{} = \boxed{}$$

$$10 + \boxed{} = \boxed{}$$